




PLAYERS  
**1+**

SUBJECT  
**MATHS**

USE YOUR...  
**Isometric/Matrix Board**



A quadrilateral is a 4 straight sided shape. Challenge your child to draw as many different quadrilaterals as possible on their isometric whiteboard.

Can they name the shapes they have drawn and list their properties?

### ***Quadrilaterals:***


*Parallelogram Oblong Square Trapezium Kite Rhombus Quadrilateral*



*Parallelogram*



*Rectangle*




*Rhombus*



*Square*



*Trapezium (UK)  
Trapezoid (US)*



*Kite*